

MS 100 College Algebra Summer 2007 PreQuiz • Name: _____

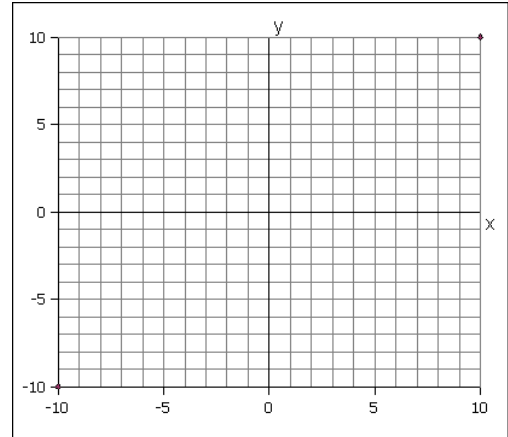
1. A ball is rolling at 7.5 feet per second. How far will the ball roll in six seconds?

2. Plot the following coordinates on the x-y graph on the answer sheet, labeling them with the letter shown:

- A. (3, 8) B. (-4, 6) C. (-7, -8) D. (7, -2)

3. Find the slope of a line through (-7, -8) and (7, -2).

4. Find the y-intercept of a line through (-7, -8) and (7, -2).



5. Write the slope-intercept form of a line through (-7, -8) and (7, -2).

6. Use the slope-intercept form of a line through (-7, -8) and (7, -2) to predict the y-value for an x-value of 49.

7. Use the slope-intercept form of a line through (-7, -8) and (7, -2) to solve for the x-value when the y-value is 28.

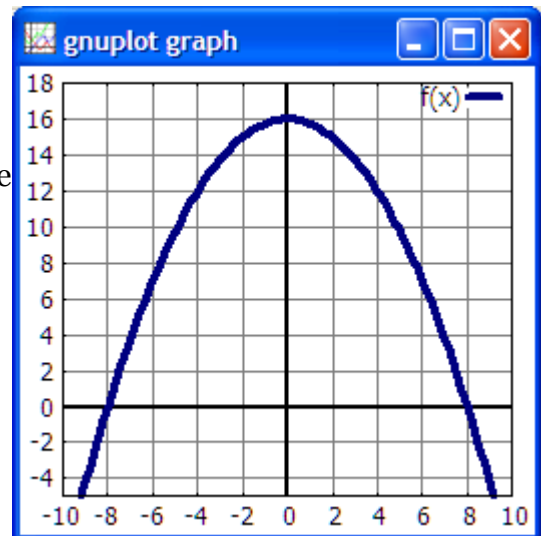
8. Is the line $y = 5x + 1$ parallel, perpendicular, or neither to the line through (-7, -8) and (7, -2).

9. What is the name of the shape of the curved function on the right?

10. What is the y-intercept for the curved function on the right?

11. What are the x-intercepts for the curved function on the right?

12. What is the degree of the curved function on the right?



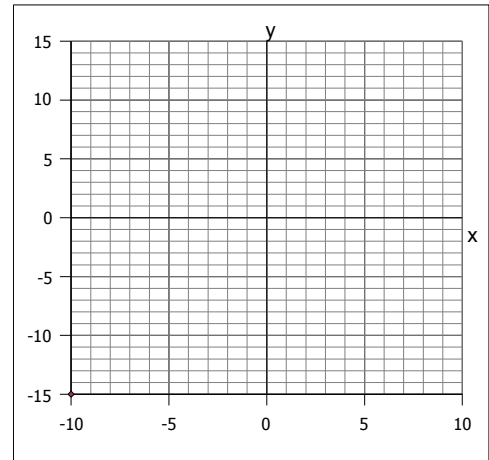
13. Solve for x by factoring: $x^2 + 13x + 42 = 0$

14. Solve for x by factoring: $x^2 + 2x - 323 = 0$

15. Determine $\frac{1+\sqrt{5}}{2}$ to three decimal places.

16. Solve by completing the square: $x^2 - x - 1 = 0$

17. On the graph sketch the function:
 $y = x^2 + 3x - 10.$



18. Solve for x by the method of your choice: $x^2 - 8x + 41 = 0$

19. Given the standard form equation of a parabola $(y-k)=\frac{1}{4p}(x-h)^2$ with a vertex at (h, k) and a focus at (h, k + p), what is the equation of a parabola with a vertex of (5, 10) and a focus at (5, 10.25)?

20. What is the name of the shape generated by the equation $\frac{x^2}{36} + \frac{y^2}{36} = 1$?

21. What is the name of the shape generated by the equation $\frac{x^2}{36} + \frac{y^2}{36} = 1$?

22. What is the name of the shape generated by the equation $\frac{x^2}{36} + \frac{y^2}{25} = 1$?

23. What is the name of the shape generated by the equation $\frac{x^2}{36} - \frac{y^2}{25} = 1$?